

FINAL REVIEW

Choose the correct answer. Write its number in the parentheses.

1. 1,500 more than 86,576 is _____.

(1) 85,026

(3) 87,581

(2) 85,076

(4) 88,076

()

2. The digit 0 in 13,095 is in the _____ place.

(1) ten thousands

(3) hundreds

(2) thousands

(4) tens

()

3. Forty-five thousand, forty written in numeral is _____.

(1) 45,014

(3) 45,140

(2) 45,040

(4) 45,400

()

4. Which of the following is **not** a factor of 66?

(1) 2

(3) 8

(2) 3

(4) 11

()

5. Which of the following is 9,000 when rounded to the nearest ten?

(1) 8,990

(3) 9,004

(2) 8,994

(4) 9,009

()

6. $3\frac{2}{5} = \frac{\square}{5}$. The missing number in the box is _____.

(1) 7

(3) 15

(2) 10

(4) 17

()

7. $3,904 \times 8 = \underline{\hspace{2cm}}$

(1) 30,232

(3) 31,520

(2) 31,232

(4) 32,520

()

8. How many quarters are there in $5\frac{3}{4}$?

(1) 15

(3) 20

(2) 19

(4) 23

()

9. A movie theater sold 1,659 tickets on Thursday and three times as many tickets on Friday. How many tickets did it sell on both days?

(1) 3,318

(3) 6,636

(2) 4,977

(4) 8,295

()

10. Anya spent \$40 and had \$10 left. What fraction of her money did she spend?

(1) $\frac{1}{5}$

(3) $\frac{3}{4}$

(2) $\frac{1}{4}$

(4) $\frac{4}{5}$

()

The following table shows Lily's grades in four subjects. Study it carefully and answer questions 11 and 12.

Subject	English	Math	Science	Social studies
Grade	75	90	63	81

11. What was the total score for Lily's best three subjects?

(1) 219

(3) 234

(2) 228

(4) 246

()

12. What was the difference between the highest and the lowest scores?

(1) 9

(3) 18

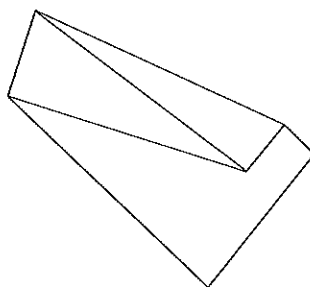
(2) 15

(4) 27

()

13. How many pair(s) of perpendicular lines are in the figure below?

- (1) 1
- (2) 2
- (3) 3
- (4) 4



()


14. Charlotte is facing north. If she turns counterclockwise 225° , she will be facing _____.

- | | |
|---------------|---------------|
| (1) northeast | (3) northwest |
| (2) southeast | (4) southwest |

()

15. Find $\angle m$ with the use of a protractor.

- (1) 55°
- (2) 60°
- (3) 115°
- (4) 120°



()

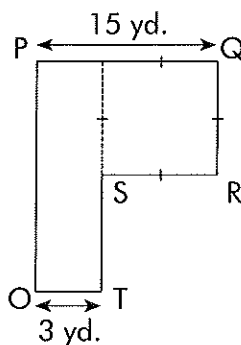
16. Which of the following is the third multiple of 8?

- | | |
|--------|--------|
| (1) 16 | (3) 26 |
| (2) 24 | (4) 28 |

()

17. The figure below is made up of a rectangle and a square. Find QR.

- (1) 10 yd.
- (2) 12 yd.
- (3) 15 yd.
- (4) 18 yd.



()

18. 14 thousands more than 58,750 is _____.

(1) 44,750

(3) 58,764

(2) 58,736

(4) 72,750

()

19. $1,489 \div 8 =$ _____ R _____

(1) 185, 1

(3) 186, 1

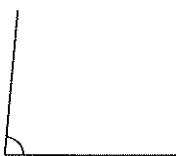
(2) 185, 6

(4) 186, 5

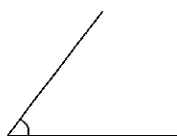
()

20. Which of the following shows an angle of 85° ?

(1)



(3)



(2)



(4)



()

Write your answers on the lines.

21. 2 ten thousands + 5 thousands + 31 hundreds + 6 tens + 4 ones =

Write the correct answer in numeral.

22. Complete the number pattern.

35,070, , 35,230, 35,310, 35,390

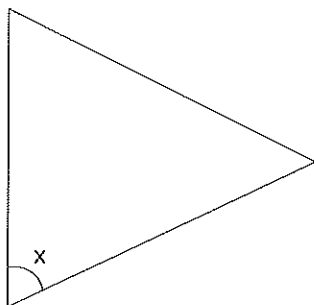
23. $180^\circ =$ -turn

24. Find the product of 532 and 37.

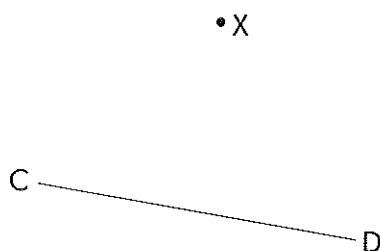
25. 21 and 42 are the first two common multiples of and .

26. Write $\frac{58}{6}$ as a mixed number in its simplest form.

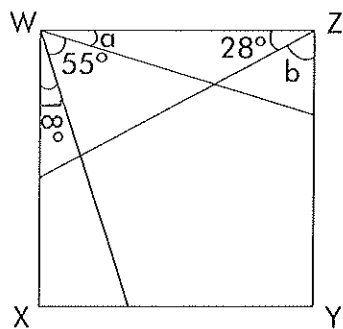
27. Measure $\angle x$.



28. Draw a line perpendicular to CD through the point X .



29. $WXYZ$ is a square. It is not drawn to scale. Find $\angle a$ and $\angle b$.



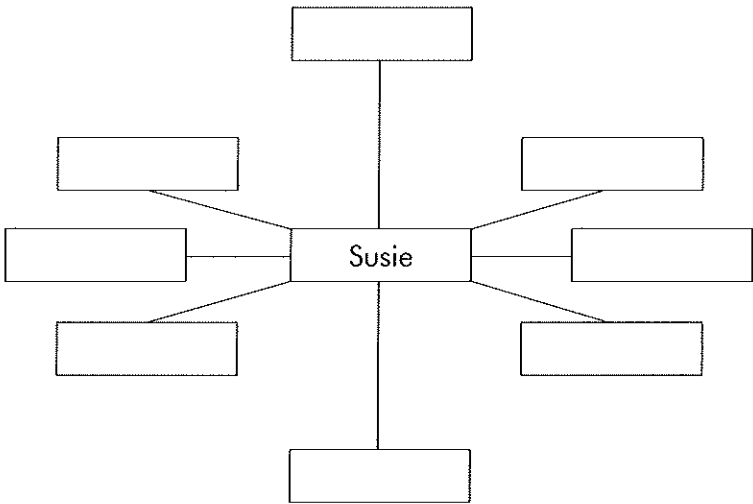
$\angle a =$ _____

$\angle b =$ _____

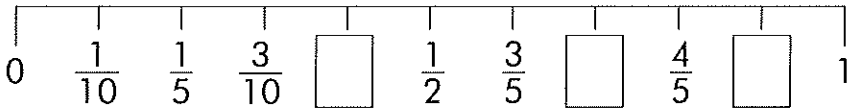
30. Find the value of $3 + \frac{2}{5} + \frac{9}{10}$.

31. Based on the given hints, write 'Nicholas' and 'Zoe' in the correct boxes.

- Nicholas is standing north of Susie.
- Zoe is standing southwest of Susie.



32. Fill in each box with the correct answer.



For questions 33 and 34, study the table below. It shows the number of pots of flowers sold by a florist during a five-day fair.

Monday	
Tuesday	
Wednesday	
Thursday	
Friday	

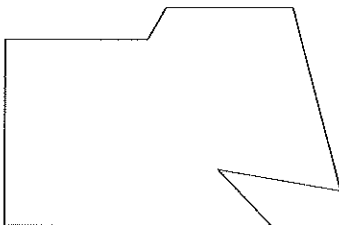
33. Use the data from the previous table to complete the following table.

Day	Number of pots of flowers
Monday	
Tuesday	
Wednesday	
Thursday	
Friday	

34. How many pots of flowers did the florist sell in all?

35. Estimate the value of $421 \div 8$.

36. How many right angles are there in the figure below?



37. When a number is divided by 7, it has a quotient of 26 and a remainder of 5. What is the number?

38. Mrs. Takashi bought 12 lb. of flour. She used $\frac{5}{6}$ of it to bake some pies. How much flour does she have left?

39. $9,055 \times 7 \approx \boxed{}$

40. Draw an angle measuring 270° .

Solve the following story problems. Show your work in the space below.

41. Mr. Fay saved \$630 a month for eight months. He then bought a television set and a stereo. After paying \$295 for the stereo, he had \$1,853 left. What was the cost of the television set?
42. A soccer ball costs \$15 more than a book. A remote-controlled car costs \$198 more than the soccer ball. If the remote-controlled car costs \$230, what is the cost of the book?

43. Alex, Juan, and Cindy shared a pizza. Alex ate $\frac{1}{4}$ of it. Brandon ate $\frac{1}{8}$ of the pizza more than Alex, and Cindy ate the rest of the pizza. What fraction of the pizza did Cindy eat?
44. Esther had 56 stickers. She gave $\frac{3}{8}$ of them to her sister. She gave some stickers to her friend. If she had 18 stickers left, how many stickers did she give to her friend?
45. Mr. Popovic is 76 years old and his granddaughter is 12 years old this year. In how many years will Mr. Popovic be five times as old as his granddaughter?